

Name: _____

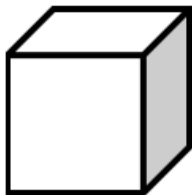
Date: _____

Volume of Cubes

Find the volume of each.

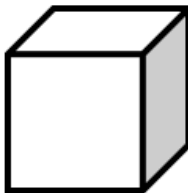
1)

9 km

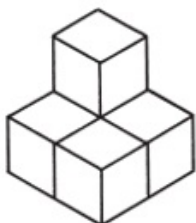


2)

11 mm

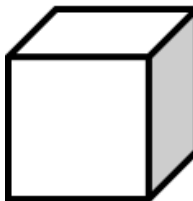


3)

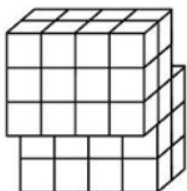


4)

7 cm

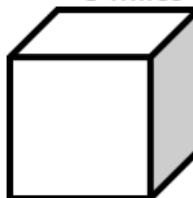


5)



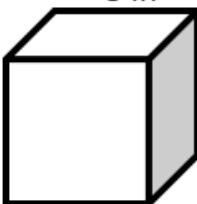
6)

3 miles



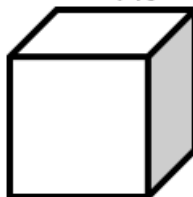
7)

8 in



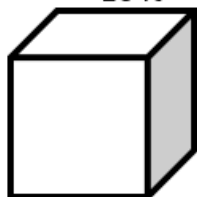
8)

4 ft



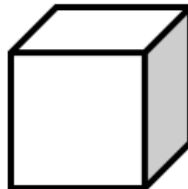
9)

10 ft



10)

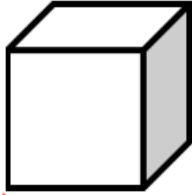
2 cm





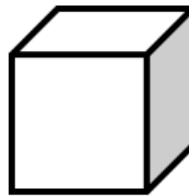
Scan me
for more
PRACTICE

1) 9 km

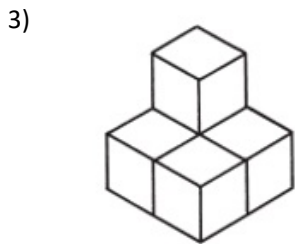


729 km³

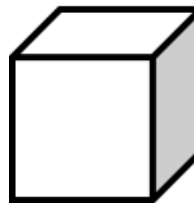
2) 11 mm



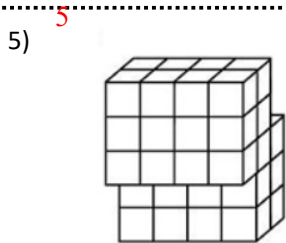
1,331 mm³



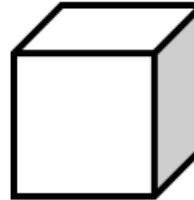
4) 7 cm



343 cm³

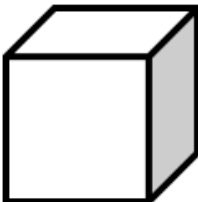


6) 3 miles



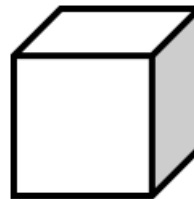
27 melis³

7) 8 in



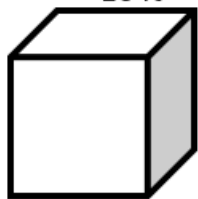
512 in³

8) 4 ft



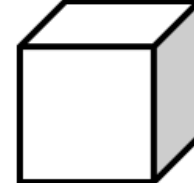
64 ft²

9) 10 ft



1,000 ft³

10) 2 cm



8 cm³