

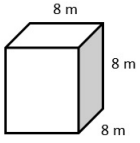
Name: _____

Date: _____

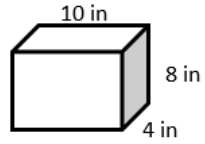
Volume of Rectangle Prisms

Find the volume of each of the rectangular prisms.

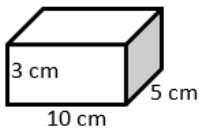
1)



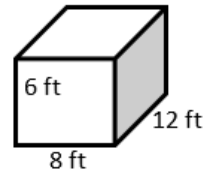
2)



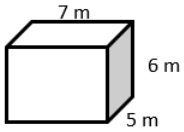
3)



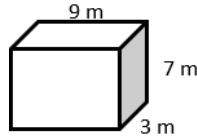
4)



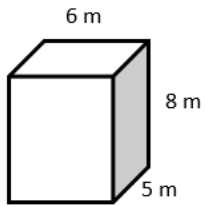
5)



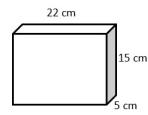
6)



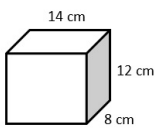
7)



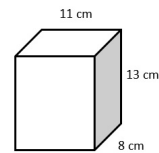
8)



9)

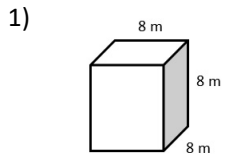


10)

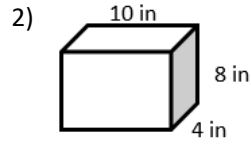




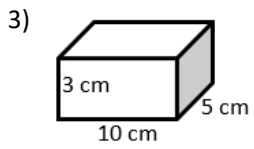
Scan me
for more
PRACTICE



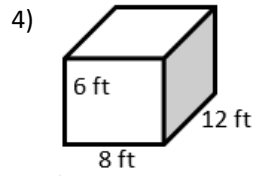
512 m^3



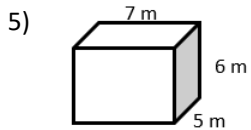
320 in^3



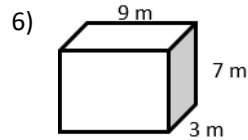
150 cm^3



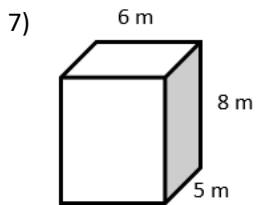
576 ft^3



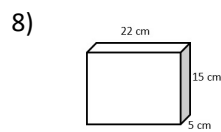
210 m^3



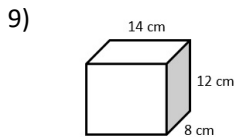
189 m^3



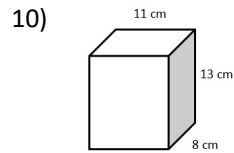
240 m^3



1650 cm^3



1344 cm^3



1144 cm^3