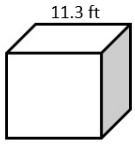


Name: \_\_\_\_\_

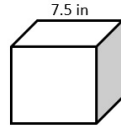
Date: \_\_\_\_\_

**volume and Surface Area of Cubes****Find the surface of each cube.**

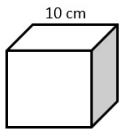
1)



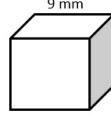
2)



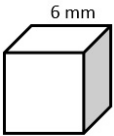
3)



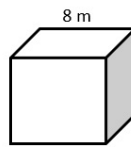
4)



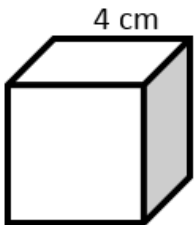
5)



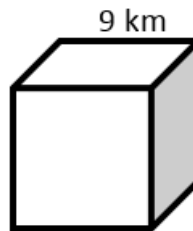
6)



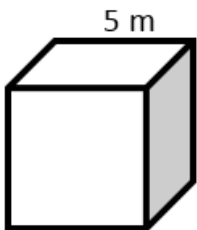
7)



8)



9)



10)

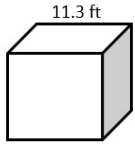




Scan me  
for more  
**PRACTICE**

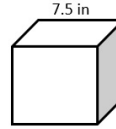
[testinar.com/t/?c=15](http://testinar.com/t/?c=15)

1)



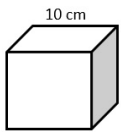
$766.14 \text{ ft}^2$

2)



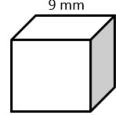
$337.5 \text{ in}^2$

3)



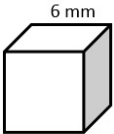
$600 \text{ cm}^2$

4)



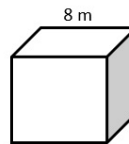
$486 \text{ mm}^2$

5)



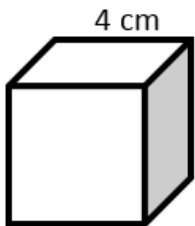
$216 \text{ mm}^2$

6)



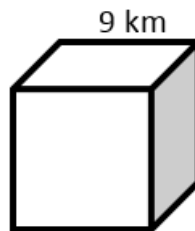
$384 \text{ m}^2$

7)



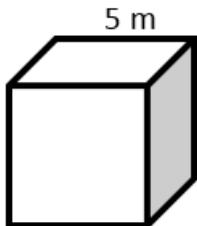
$96 \text{ cm}^2$

8)



$486 \text{ km}^2$

9)



$150 \text{ m}^2$

10)



24