

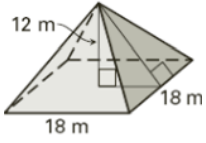
Name: _____

Date: _____

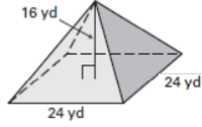
Pyramids and Cone

Find the volume of each Pyramid and Cone. ($\pi = 3.14$)

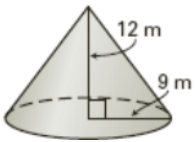
1)



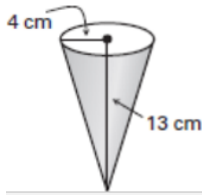
2)



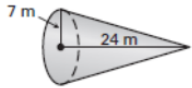
3)



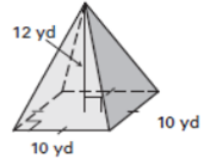
4)



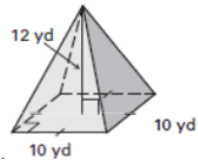
5)



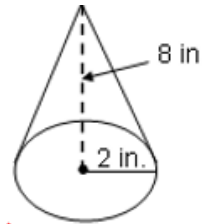
6)



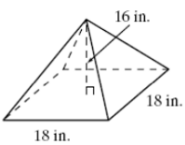
7)



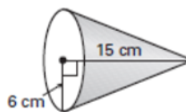
8)



9)

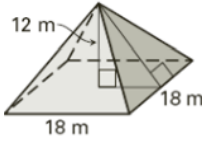


10)



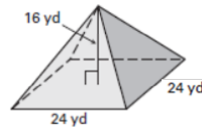


1)



864 m^2

2)



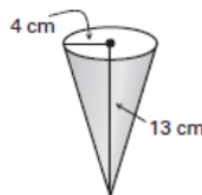
3.072 yd^3

3)



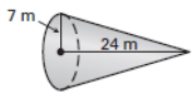
$1,017.9 \text{ m}^3$

4)



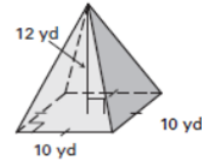
217.7 cm^3

5)



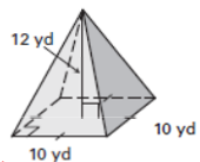
$1,230.9 \text{ m}^3$

6)



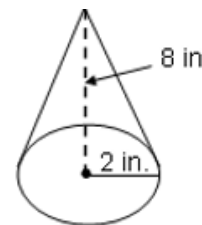
300 yd^3

7)



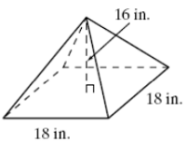
360 yd^2

8)



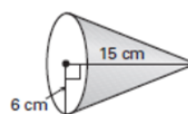
64.34 in^2

9)



$1,728 \text{ in}^3$

10)



417.4 cm^2