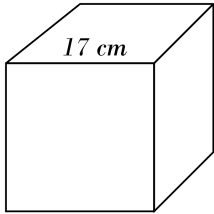


Volume of Cubes

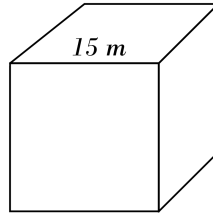


Find the volume of each.

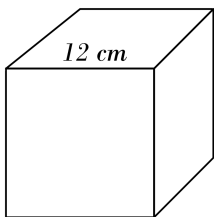
1)



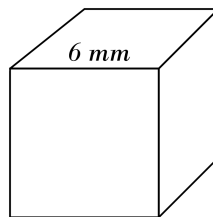
2)



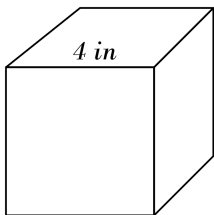
3)



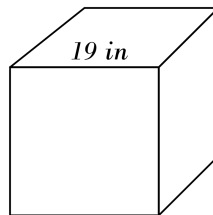
4)



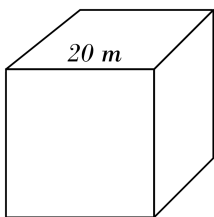
5)



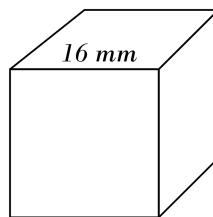
6)



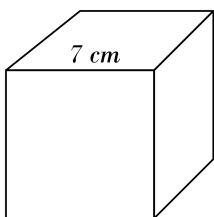
7)



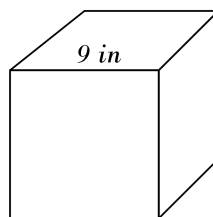
8)



9)



10)

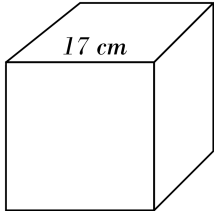


Answers of Volume of Cubes

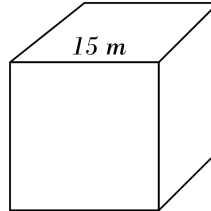


Find the volume of each.

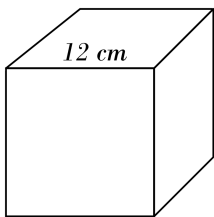
1) 4913 cm^3



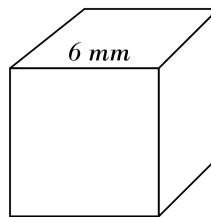
2) 3375 m^3



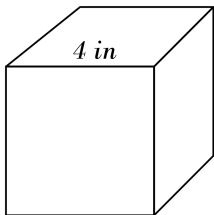
3) 1728 cm^3



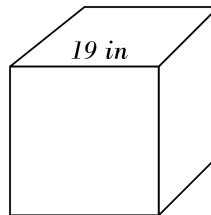
4) 216 mm^3



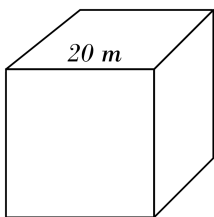
5) 64 in^3



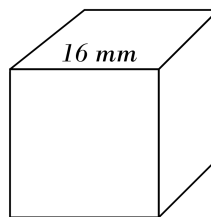
6) 6859 in^3



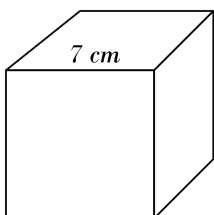
7) 8000 m^3



8) 4096 mm^3



9) 343 cm^3



10) 729 in^3

