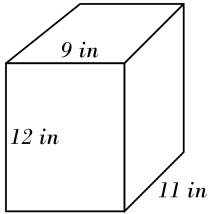


Volume of Rectangle Prisms

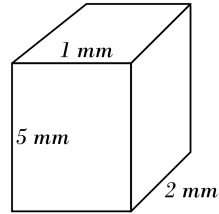


Find the volume of each rectangular prisms.

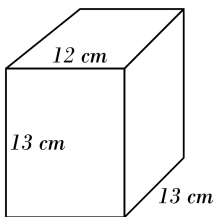
1)



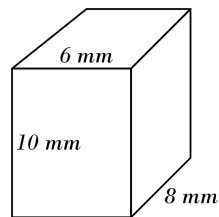
2)



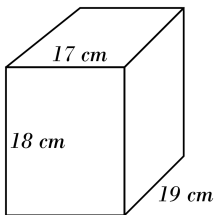
3)



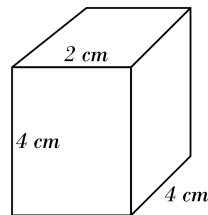
4)



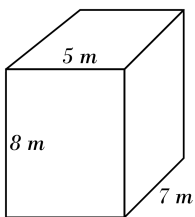
5)



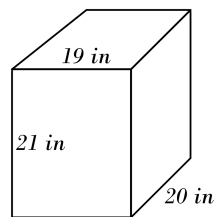
6)



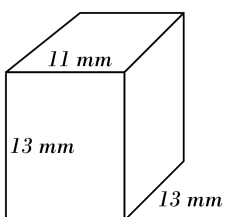
7)



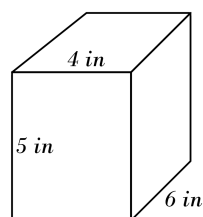
8)



9)



10)

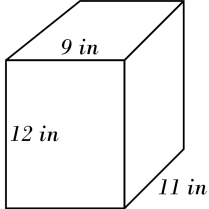


Answers of Volume of Rectangle Prisms

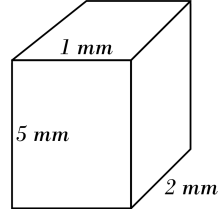


Find the volume of each rectangular prisms.

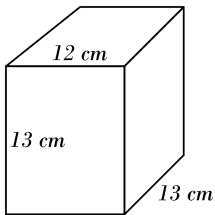
1) **1188 in³**



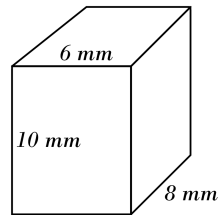
2) **10 mm³**



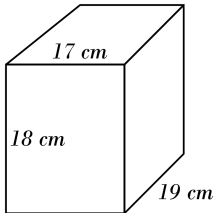
3) **2028 cm³**



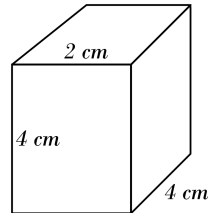
4) **480 mm³**



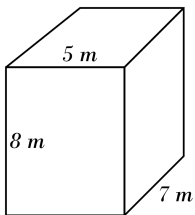
5) **5814 cm³**



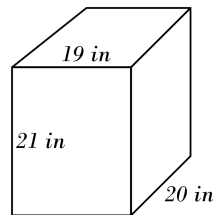
6) **32 cm³**



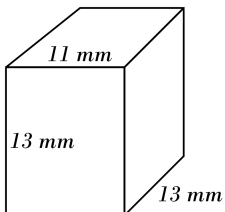
7) **280 m³**



8) **7980 in³**



9) **1859 mm³**



10) **120 in³**

