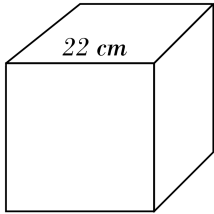


# Volume and Surface Area of Cubes

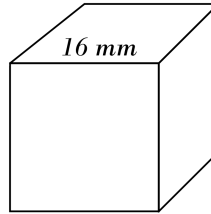


Find the surface area of each cube.

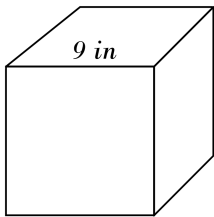
1)



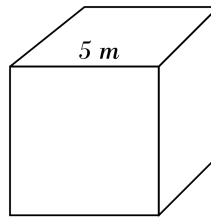
2)



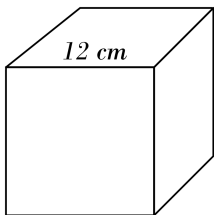
3)



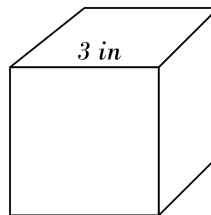
4)



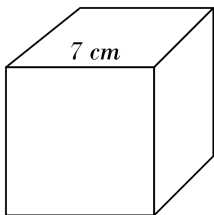
5)



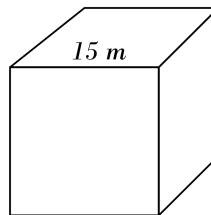
6)



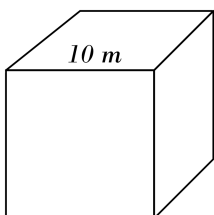
7)



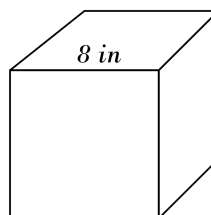
8)



9)



10)

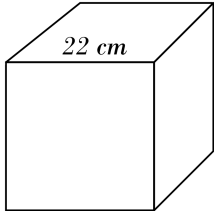


# Answers of volume and Surface Area of Cubes

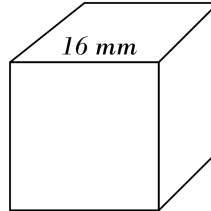


Find the surface area of each cube.

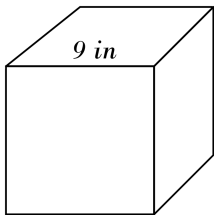
1)  $2904 \text{ cm}^2$



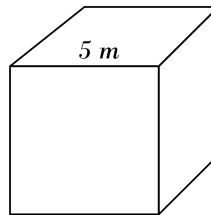
2)  $1536 \text{ mm}^2$



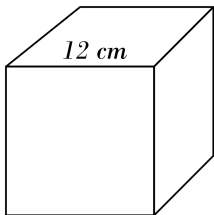
3)  $486 \text{ in}^2$



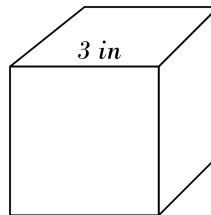
4)  $150 \text{ m}^2$



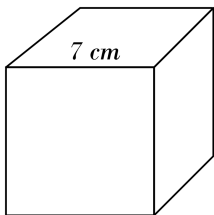
5)  $864 \text{ cm}^2$



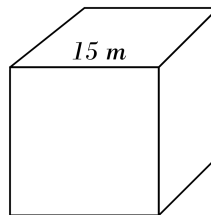
6)  $54 \text{ in}^2$



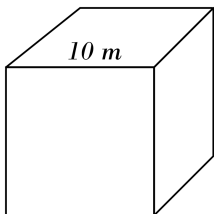
7)  $294 \text{ cm}^2$



8)  $1350 \text{ m}^2$



9)  $600 \text{ m}^2$



10)  $384 \text{ in}^2$

