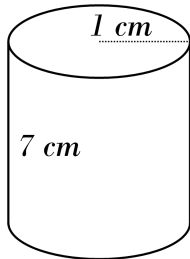


Volume of a Cylinder

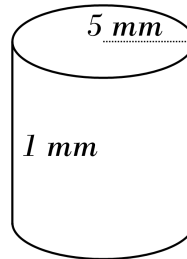


Find the volume of each cylinder.

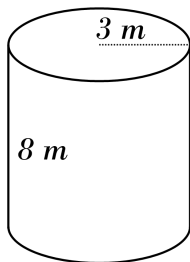
1)



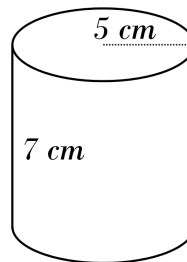
2)



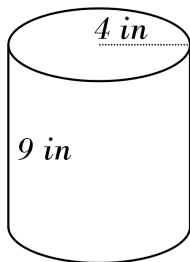
3)



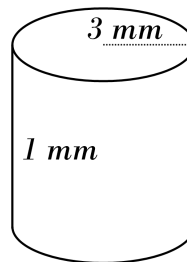
4)



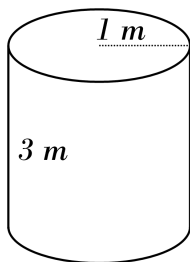
5)



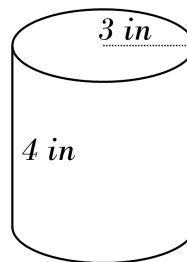
6)



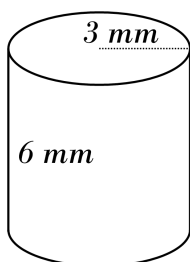
7)



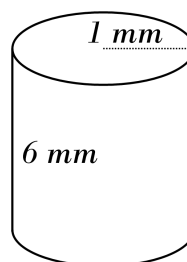
8)



9)



10)

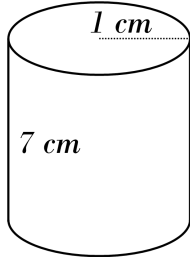


Answers of Volume of a Cylinder

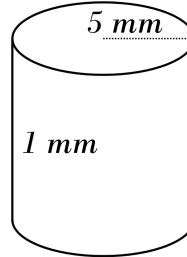


Find the volume of each cylinder.

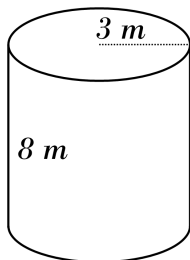
1) 21.98 cm^3



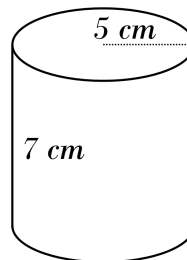
2) 78.5 mm^3



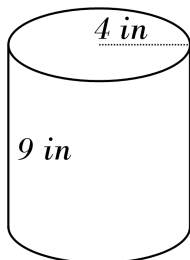
3) 226.08 m^3



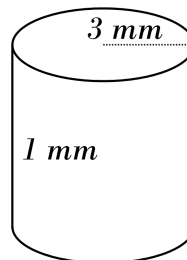
4) 549.5 cm^3



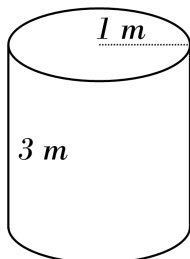
5) 452.16 in^3



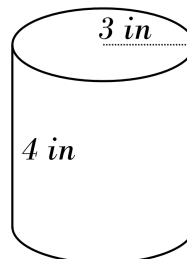
6) 28.26 mm^3



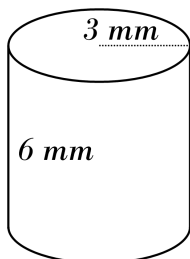
7) 9.42 m^3



8) 113.04 in^3



9) 169.56 mm^3



10) 18.84 mm^3

