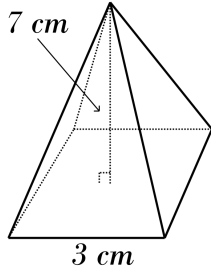


Pyramids and Cone

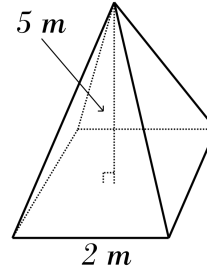


Find the volume of each pyramid. ($\pi = 3.14$)

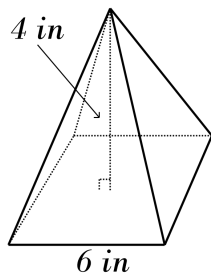
1)



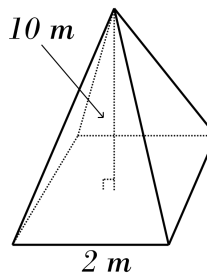
2)



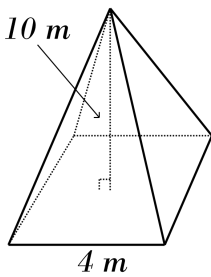
3)



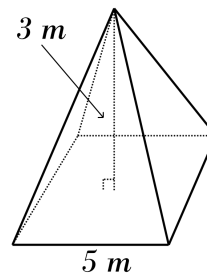
4)



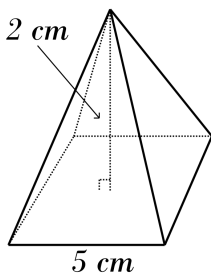
5)



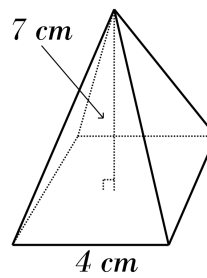
6)



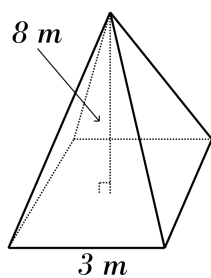
7)



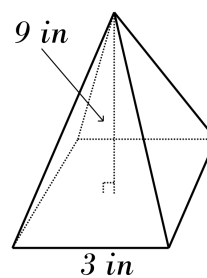
8)



9)



10)

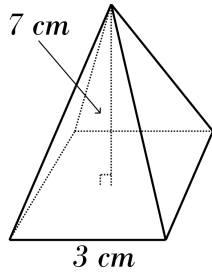


Answers of Pyramids and Cone

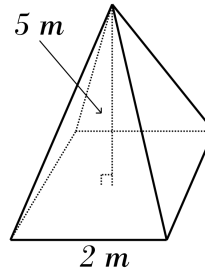


Find the volume of each pyramid. ($\pi = 3.14$)

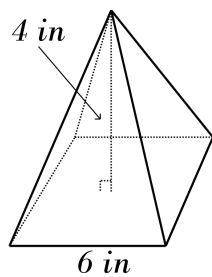
1) 7 cm^3



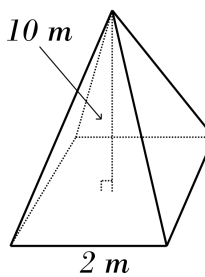
2) 3.33 m^3



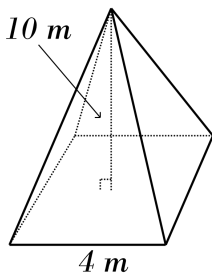
3) 8 in^3



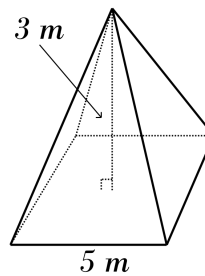
4) 6.67 m^3



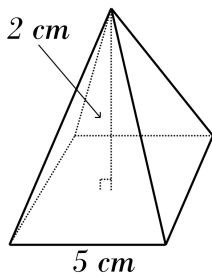
5) 13.33 m^3



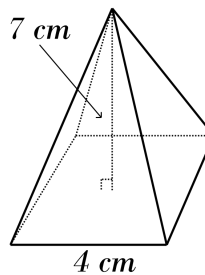
6) 5 m^3



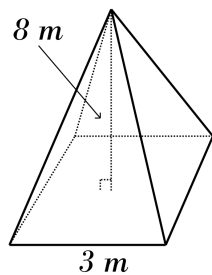
7) 3.33 cm^3



8) 9.33 cm^3



9) 8 m^3



10) 9 in^3

