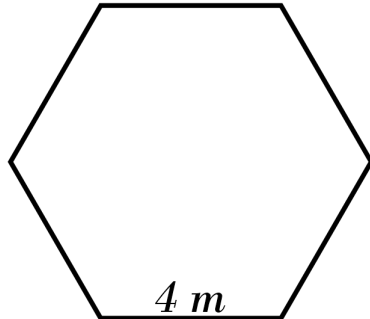


## Perimeter of Polygons

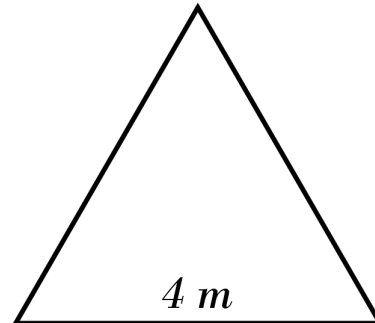


Find the perimeter of each shape.

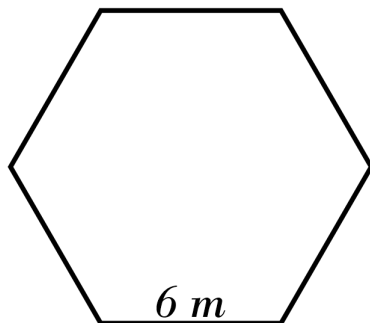
- 1) What is the perimeter of the following regular hexagon?



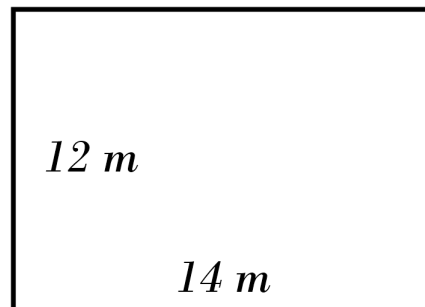
- 2) What is the perimeter of the following equilateral triangle?



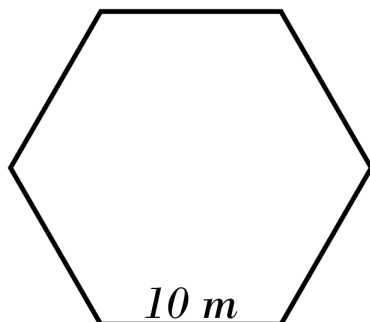
- 3) What is the perimeter of the following regular hexagon?



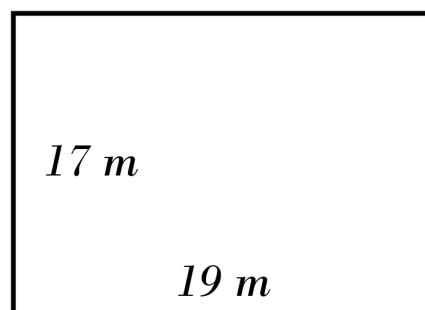
- 4) What is the perimeter of the following rectangle?



- 5) What is the perimeter of the following regular hexagon?



- 6) What is the perimeter of the following rectangle?

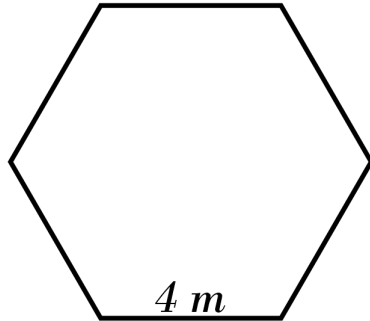


## Answers of Perimeter of Polygons

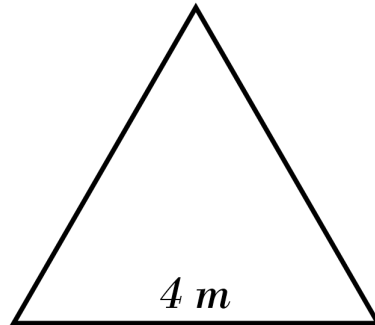


Find the perimeter of each shape.

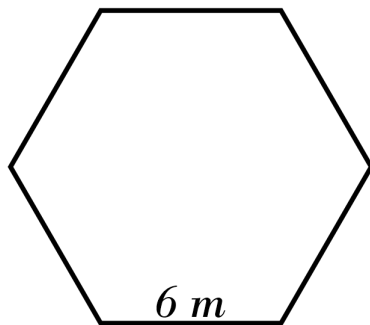
- 1) What is the perimeter of the following regular hexagon? **24 m**



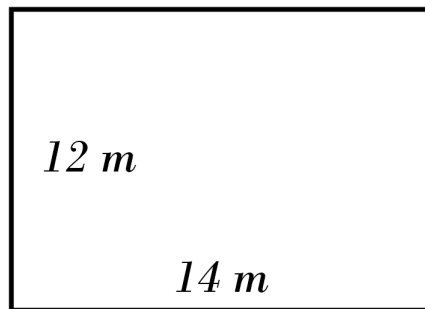
- 2) What is the perimeter of the following equilateral triangle? **12 m**



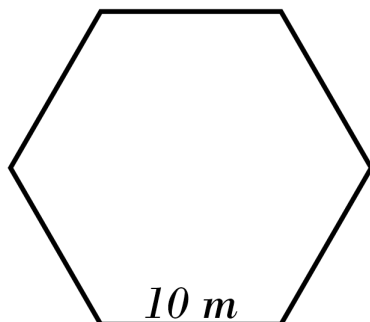
- 3) What is the perimeter of the following regular hexagon? **36 m**



- 4) What is the perimeter of the following rectangle? **52 m**



- 5) What is the perimeter of the following regular hexagon? **60 m**



- 6) What is the perimeter of the following rectangle? **72 m**

