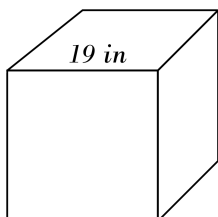


Volume of Cubes

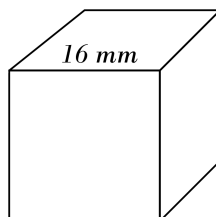


Find the volume of each.

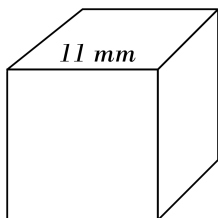
1)



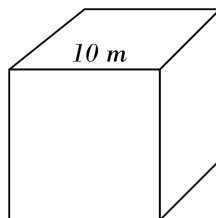
2)



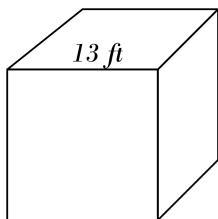
3)



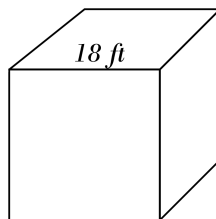
4)



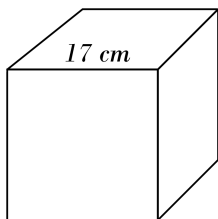
5)



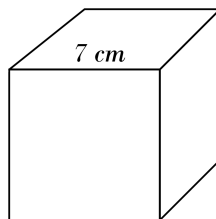
6)



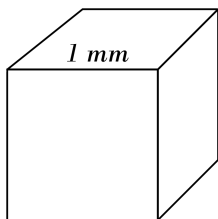
7)



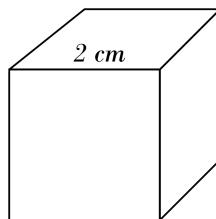
8)



9)



10)

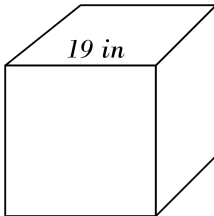


Answers of Volume of Cubes

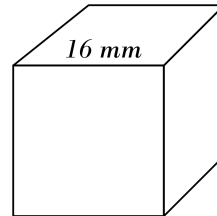


Find the volume of each.

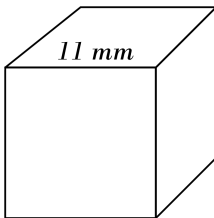
1) 6859 in^3



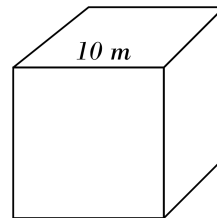
2) 4096 mm^3



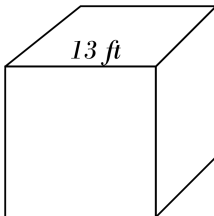
3) 1331 mm^3



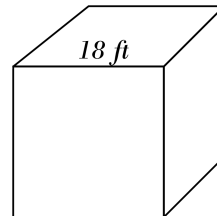
4) 1000 m^3



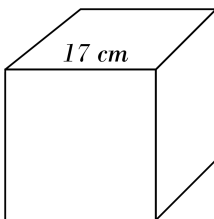
5) 2197 ft^3



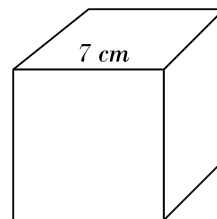
6) 5832 ft^3



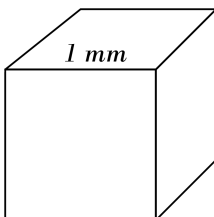
7) 4913 cm^3



8) 343 cm^3



9) 1 mm^3



10) 8 cm^3

