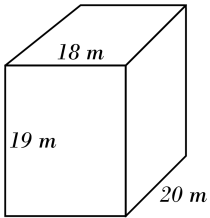


Volume of Rectangle Prisms

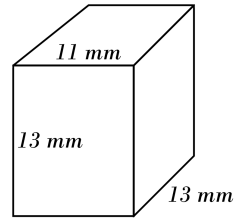


Find the volume of each rectangular prisms.

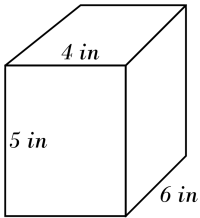
1)



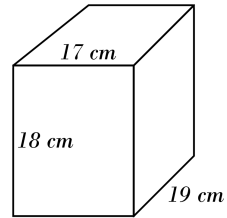
2)



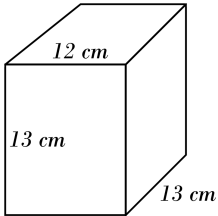
3)



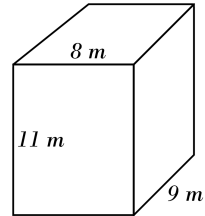
4)



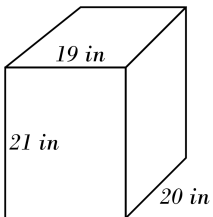
5)



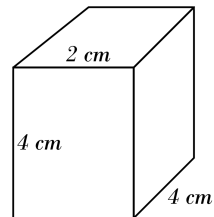
6)



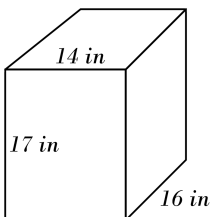
7)



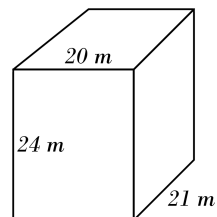
8)



9)



10)

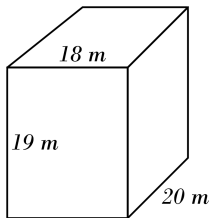


Answers of Volume of Rectangle Prisms

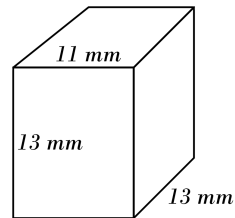


Find the volume of each rectangular prisms.

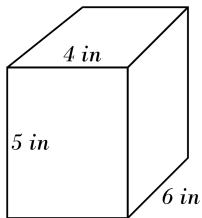
1) 6840 m^3



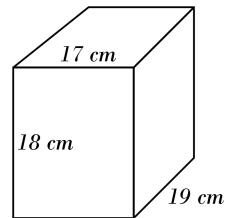
2) 1859 mm^3



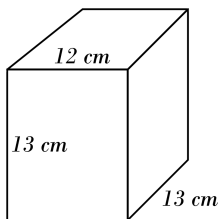
3) 120 in^3



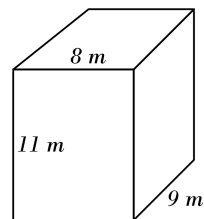
4) 5814 cm^3



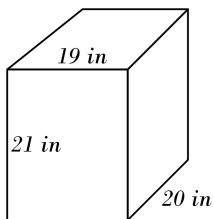
5) 2028 cm^3



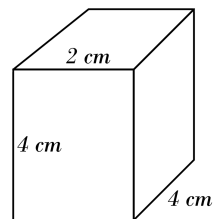
6) 792 m^3



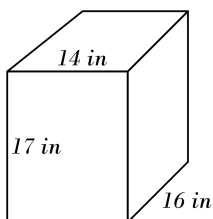
7) 7980 in^3



8) 32 cm^3



9) 3808 in^3



10) 10080 m^3

