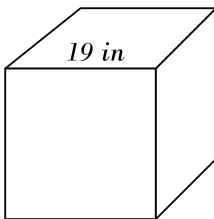


## Volume and Surface Area of Cubes

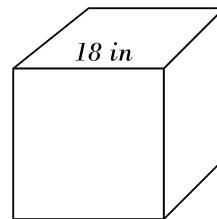


Find the surface area of each cube.

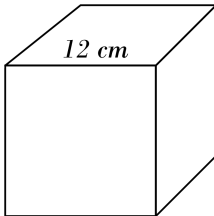
1)



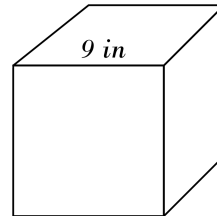
2)



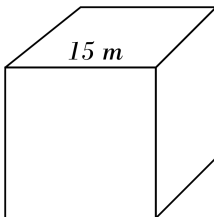
3)



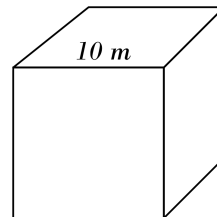
4)



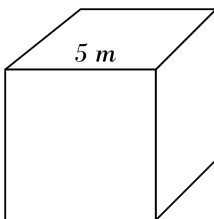
5)



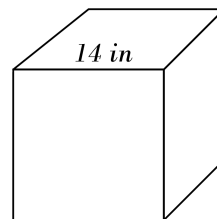
6)



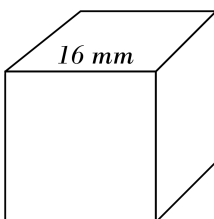
7)



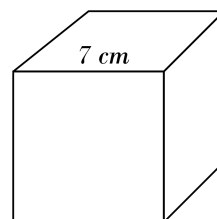
8)



9)



10)

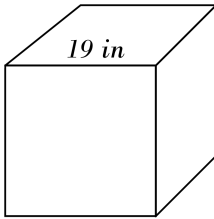


## Answers of volume and Surface Area of Cubes

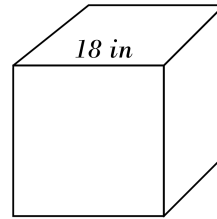


Find the surface area of each cube.

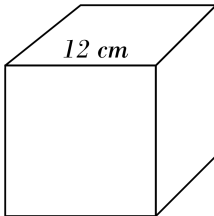
1) **2166 in<sup>2</sup>**



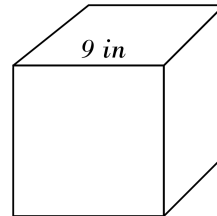
2) **1944 in<sup>2</sup>**



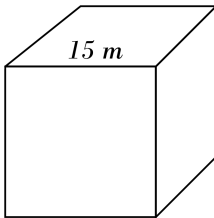
3) **864 cm<sup>2</sup>**



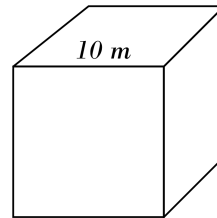
4) **486 in<sup>2</sup>**



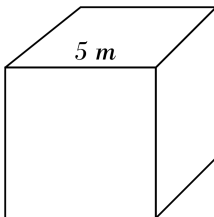
5) **1350 m<sup>2</sup>**



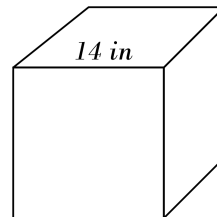
6) **600 m<sup>2</sup>**



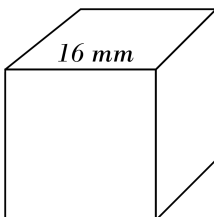
7) **150 m<sup>2</sup>**



8) **1176 in<sup>2</sup>**



9) **1536 mm<sup>2</sup>**



10) **294 cm<sup>2</sup>**

