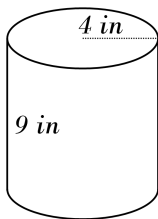


## Volume of a Cylinder

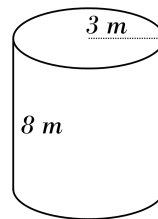


Find the volume of each cylinder.

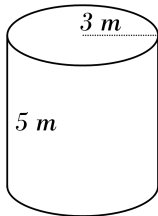
1)



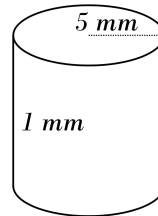
2)



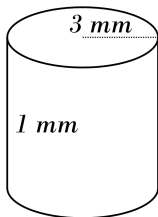
3)



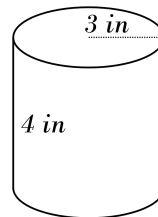
4)



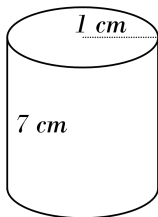
5)



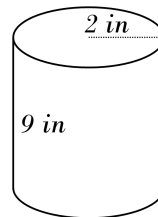
6)



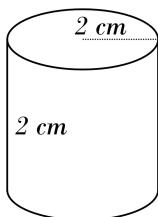
7)



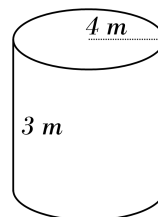
8)



9)



10)

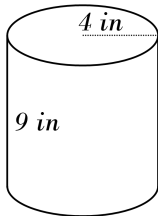


## Answers of Volume of a Cylinder

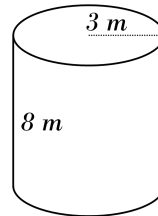


Find the volume of each cylinder.

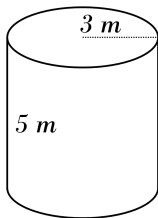
1)  $452.16 \text{ in}^3$



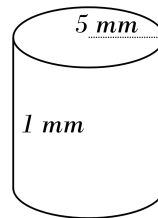
2)  $226.08 \text{ m}^3$



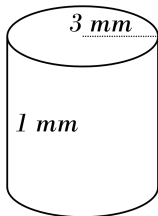
3)  $141.3 \text{ m}^3$



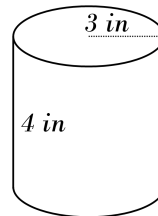
4)  $78.5 \text{ mm}^3$



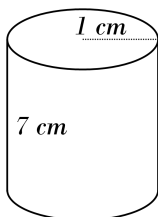
5)  $28.26 \text{ mm}^3$



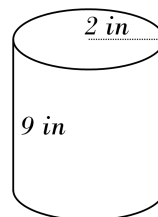
6)  $113.04 \text{ in}^3$



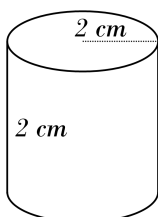
7)  $21.98 \text{ cm}^3$



8)  $113.04 \text{ in}^3$



9)  $25.12 \text{ cm}^3$



10)  $150.72 \text{ m}^3$

