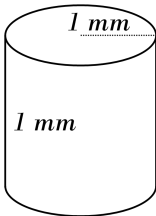


## Surface Area of a Cylinder

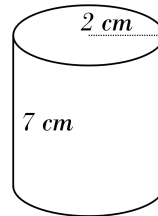


Find the surface area of each cylinder.

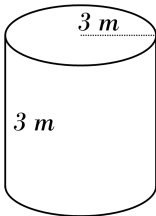
1)



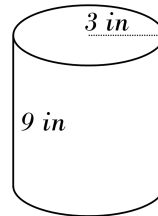
2)



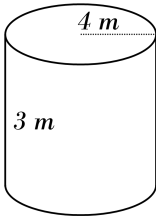
3)



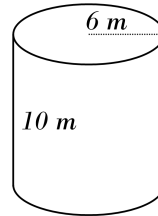
4)



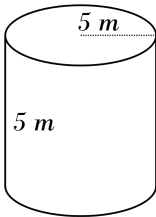
5)



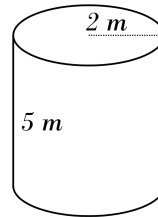
6)



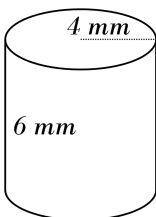
7)



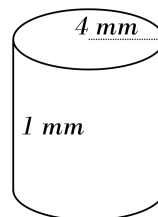
8)



9)



10)

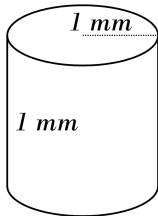


## Answers of Surface Area of a Cylinder

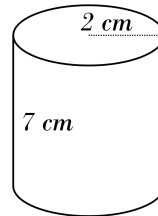


Find the surface area of each cylinder.

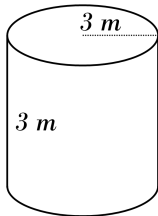
1)  $12.56 \text{ mm}^2$



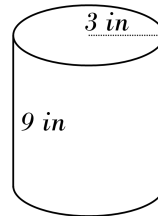
2)  $113.04 \text{ cm}^2$



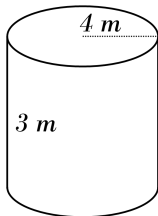
3)  $113.04 \text{ m}^2$



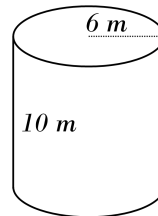
4)  $226.08 \text{ in}^2$



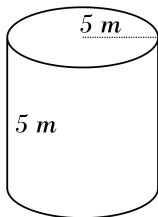
5)  $175.84 \text{ m}^2$



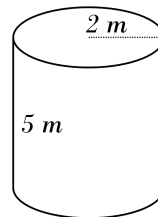
6)  $602.88 \text{ m}^2$



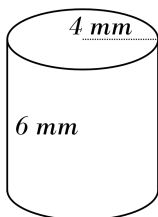
7)  $314 \text{ m}^2$



8)  $87.92 \text{ m}^2$



9)  $251.2 \text{ mm}^2$



10)  $125.6 \text{ mm}^2$

