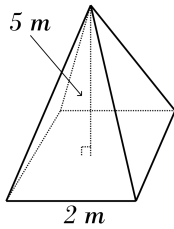


Pyramids and Cone

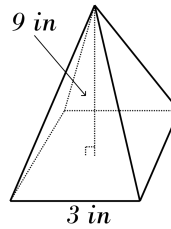


 Find the volume of each pyramid. ($\pi = 3.14$)

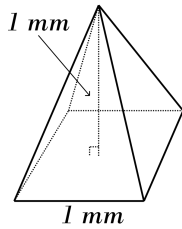
1)



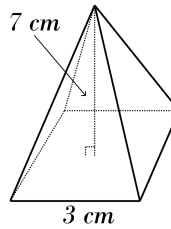
2)



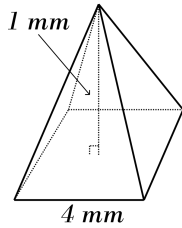
3)



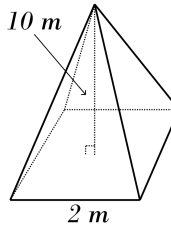
4)



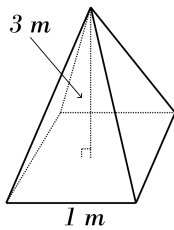
5)



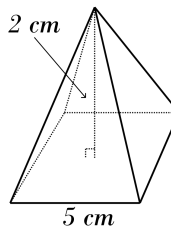
6)



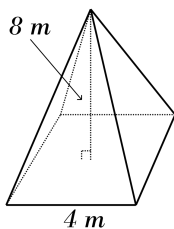
7)



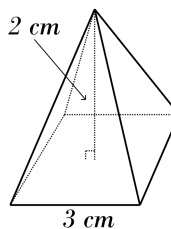
8)




9)



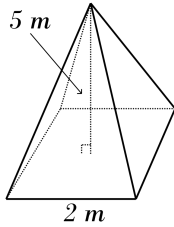
10)



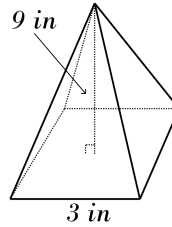
Answers of Pyramids and Cone

 Find the volume of each pyramid. ($\pi = 3.14$)

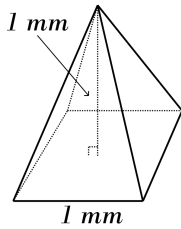
1) **3.33 m^3**



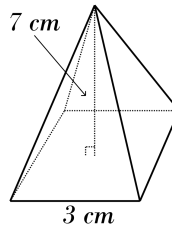
2) **9 in^3**



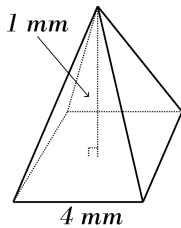
3) **0.33 mm^3**



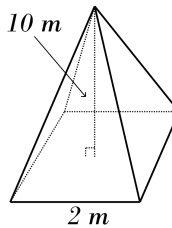
4) **7 cm^3**



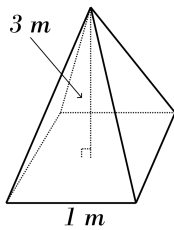
5) **1.33 mm^3**



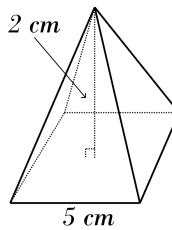
6) **6.67 m^3**



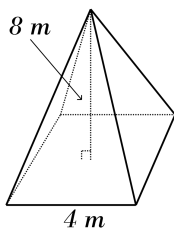
7) **1 m^3**



8) **3.33 cm^3**



9) **10.67 m^3**



10) **2 cm^3**

