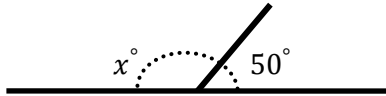




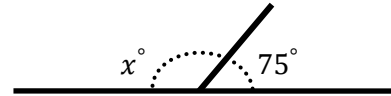
Angles

Find the value of x in the following figures.

1)



2)



3)



4)



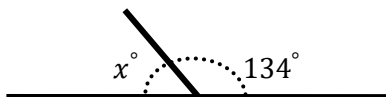
5)



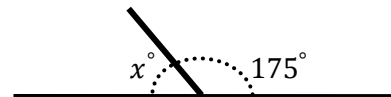
6)



7)



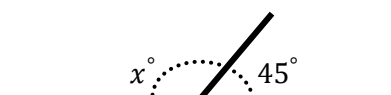
8)



9)



10)



QUIZ ?

So Much More Online! Please visit: testinar.com

MORE ?



testinar.com/qr1x

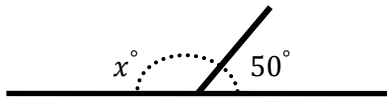


Answers

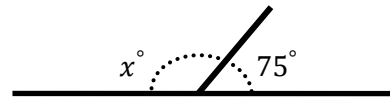


Find the value of x in the following figures.

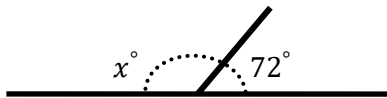
1) 130°



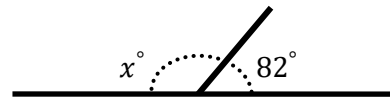
2) 105°



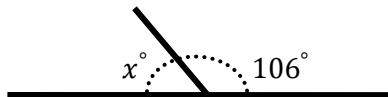
3) 108°



4) 98°



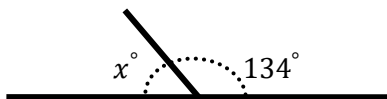
5) 74°



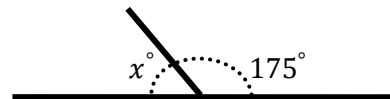
6) 144°



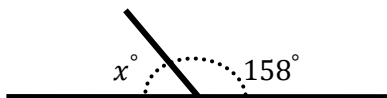
7) 46°



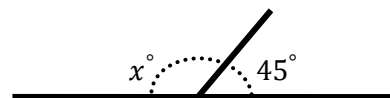
8) 5°



9) 22°



10) 135°



QUIZ ?

So Much More Online! Please visit: testinar.com

MORE ?



testinar.com/qr1x