



## Graphing Lines Using Standard Form

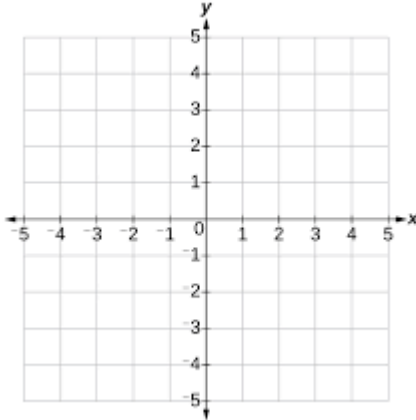
Name: \_\_\_\_\_

Date: \_\_\_\_\_

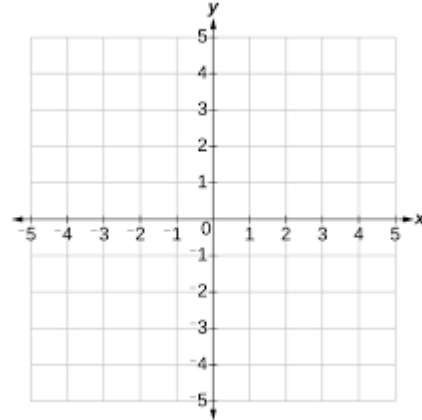


Sketch the graph of each line.

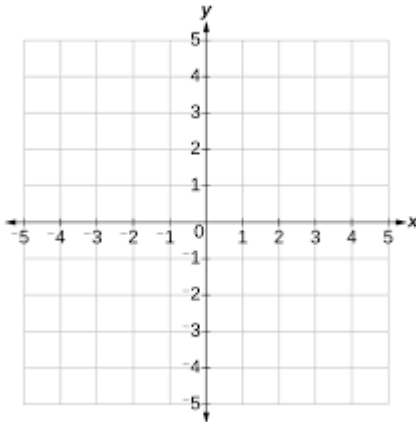
1)  $3x + 5y = 15$



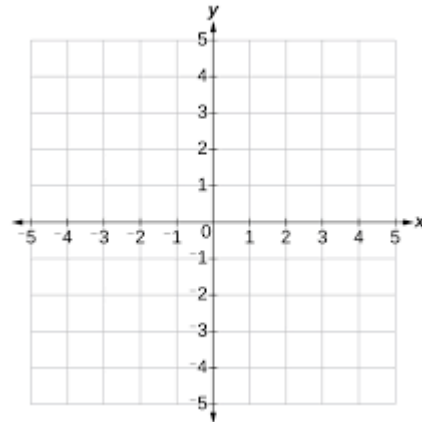
2)  $-2x + 3y = -6$



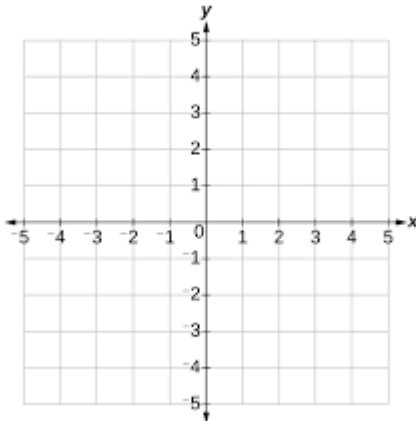
3)  $2x + y = 4$



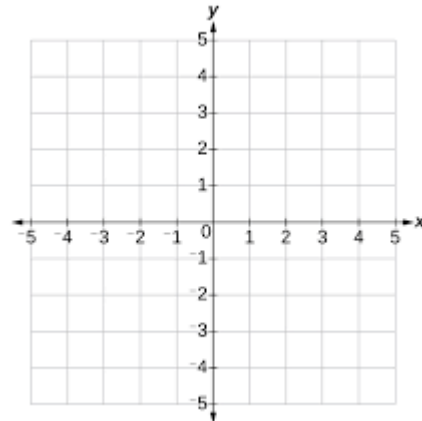
4)  $x - 4y = 4$



5)  $x + 2y = 4$



6)  $-2y - 5x = 10$



QUIZ ?

So Much More Online! Please visit: [testinar.com](https://testinar.com)

MORE ?



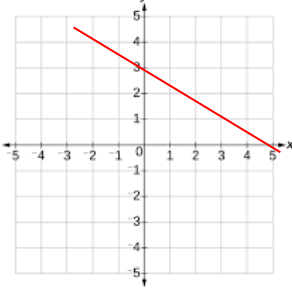
# Graphing Lines Using Standard Form

## Answers

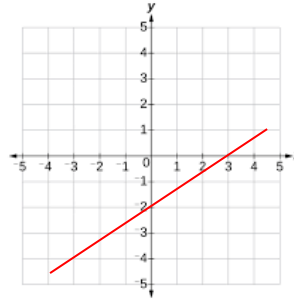


Sketch the graph of each line.

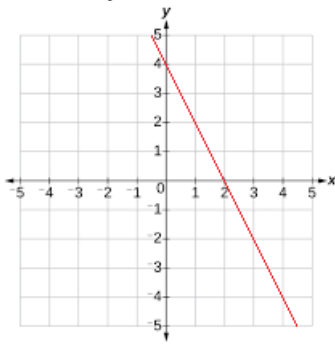
1)  $3x + 5y = 15$



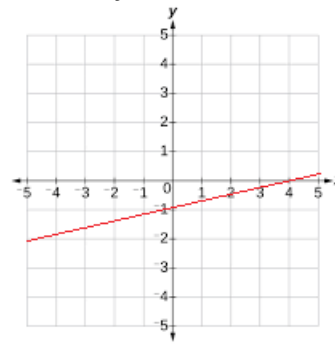
2)  $-2x + 3y = -6$



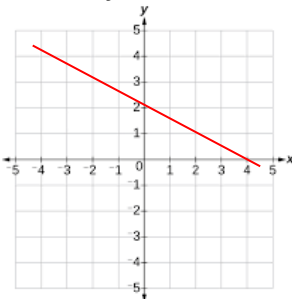
3)  $2x + y = 4$



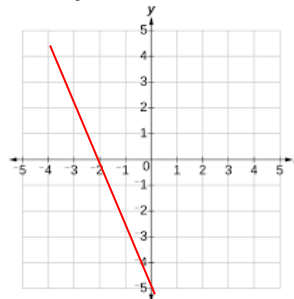
4)  $x - 4y = 4$



5)  $x + 2y = 4$



6)  $-2y - 5x = 10$



QUIZ ?

So Much More Online! Please visit: [testinar.com](https://testinar.com)



MORE ?