



Surface Area of a Rectangle Prism

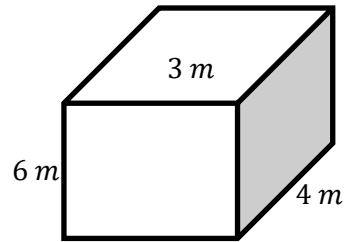
Name: _____

Date: _____

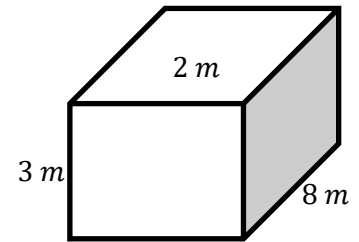


Find the surface of each prism.

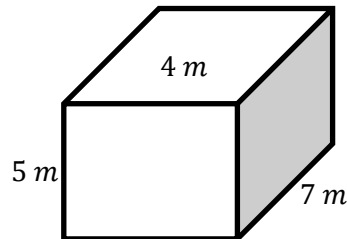
1)



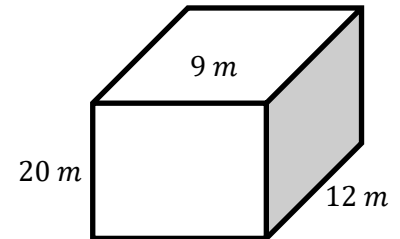
2)



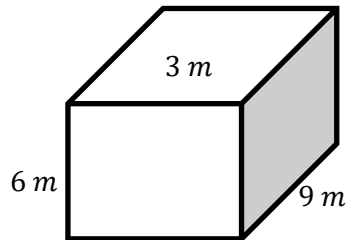
3)



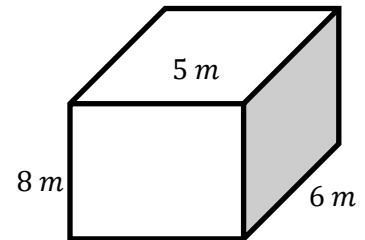
4)



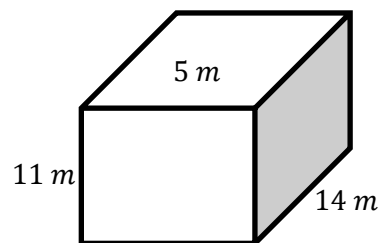
5)



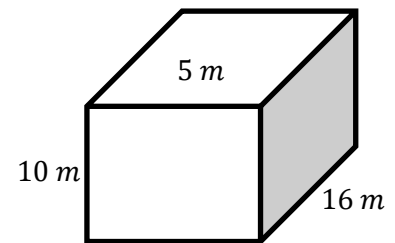
6)



7)



8)



QUIZ ?

So Much More Online! Please visit: testinar.com

MORE ?



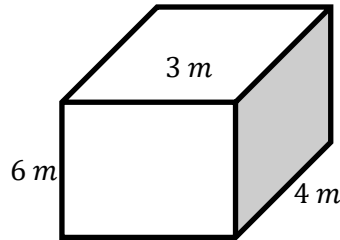
Surface Area of a Rectangle Prism

Answers

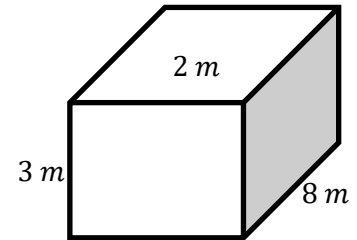


Find the surface of each prism.

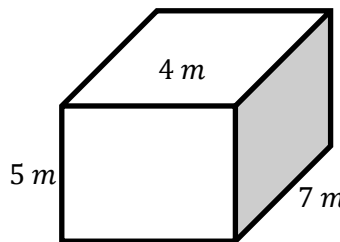
1) $S = 108 \text{ m}^2$



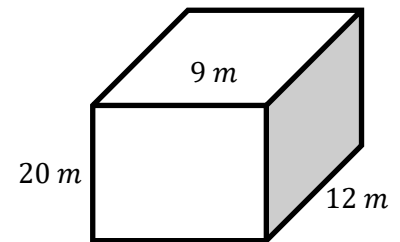
2) $S = 92 \text{ m}^2$



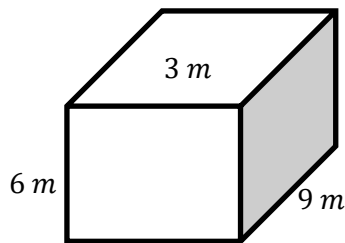
3) $S = 166 \text{ m}^2$



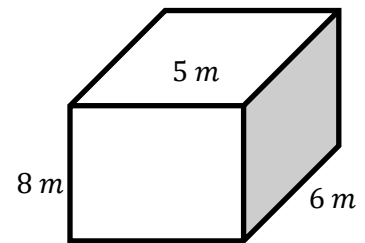
4) $S = 1056 \text{ m}^2$



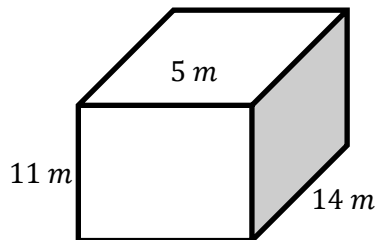
5) $S = 198 \text{ m}^2$



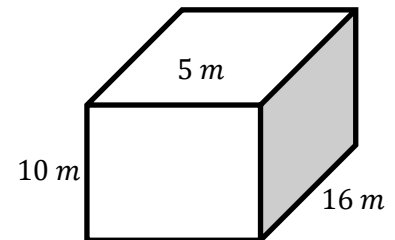
6) $S = 236 \text{ m}^2$



7) $S = 558 \text{ m}^2$



8) $S = 580 \text{ m}^2$



QUIZ ?

So Much More Online! Please visit: testinar.com

MORE ?